
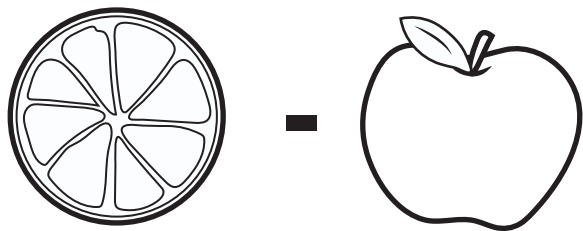


# Mystery Fruit Math


Use the clues below to figure out what number each piece of fruit represents, and then solve the final equation!


$$\text{Apple} + \text{Apple} + \text{Apple} = 9$$


The apple equals: \_\_\_\_\_


$$\text{Orange} - \text{Apple} = 7$$

The orange equals: \_\_\_\_\_


$$2 \times \text{Orange} + \text{Pear} = 24$$

The pear equals: \_\_\_\_\_


$$\text{Apple} + \text{Orange} + \text{Pear} = ?$$

The final equation equals: \_\_\_\_\_